

NAME \_\_\_\_\_


# Christmas Tree Count


IT'S RAINING CHRISTMAS TREES!


Directions: How many Christmas trees do you see? Add count together, then write the correct answer in the box.

PROBLEMS


ANSWERS

	
--	--

	
--	--

	
--	--

	
--	--

	
--	--

NAME \_\_\_\_\_

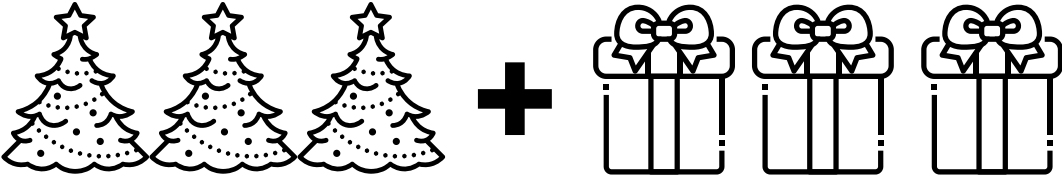
# Christmas Tree Addition


IT'S RAINING CHRISTMAS TREES!


Directions: Add the Christmas trees and gift boxes together then write the correct answer in the box.


PROBLEMS


ANSWERS

	$3+3=$
--	--------

	$2+5=$
--	--------

	$2+4=$
--	--------

	$3+2=$
---	--------


	$4+3=$
--	--------


NAME \_\_\_\_\_

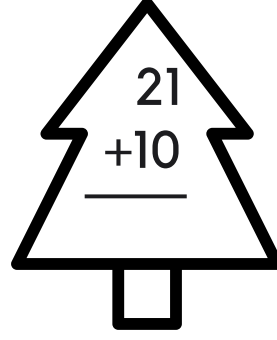
# Christmas Tree Addition

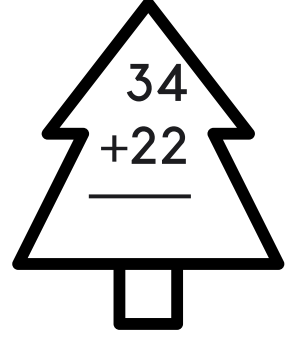
IT'S RAINING CHRISTMAS TREES!

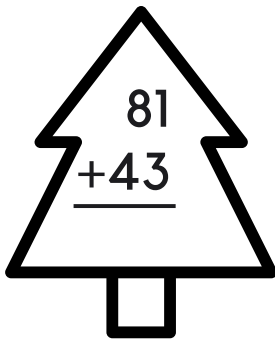
Directions: Add the Christmas trees and gift boxes together then write the correct answer in the box. Circle the Christmas tree with the highest number.



$$\begin{array}{r} 6 \\ +13 \\ \hline \end{array}$$

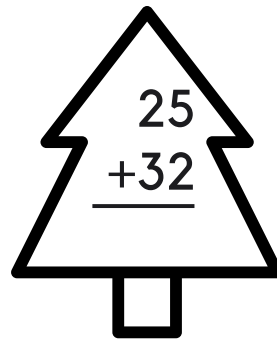

$$\begin{array}{r} 8 \\ +17 \\ \hline \end{array}$$

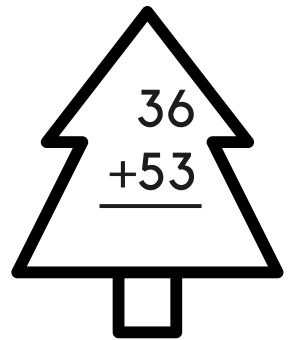

$$\begin{array}{r} 21 \\ +10 \\ \hline \end{array}$$



$$\begin{array}{r} 34 \\ +22 \\ \hline \end{array}$$

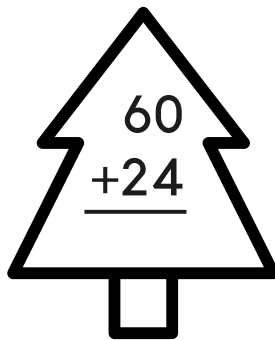

$$\begin{array}{r} 81 \\ +43 \\ \hline \end{array}$$

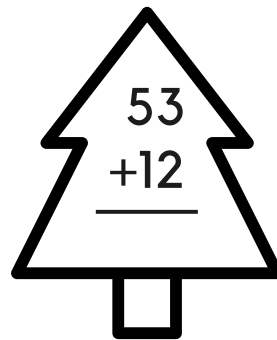

$$\begin{array}{r} 90 \\ +13 \\ \hline \end{array}$$



$$\begin{array}{r} 25 \\ +32 \\ \hline \end{array}$$

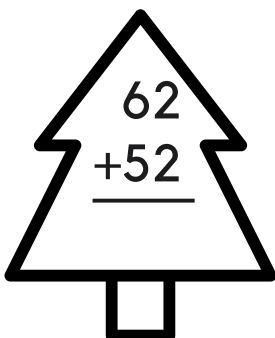

$$\begin{array}{r} 36 \\ +53 \\ \hline \end{array}$$



$$\begin{array}{r} 8 \\ +93 \\ \hline \end{array}$$

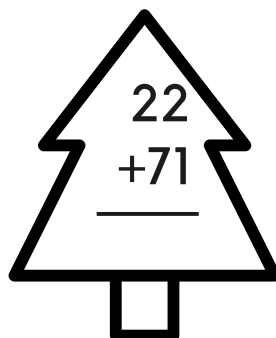

$$\begin{array}{r} 60 \\ +24 \\ \hline \end{array}$$

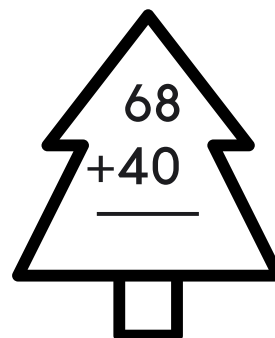

$$\begin{array}{r} 53 \\ +12 \\ \hline \end{array}$$


$$\begin{array}{r} 74 \\ +32 \\ \hline \end{array}$$


$$\begin{array}{r} 62 \\ +52 \\ \hline \end{array}$$


$$\begin{array}{r} 94 \\ +23 \\ \hline \end{array}$$


$$\begin{array}{r} 22 \\ +71 \\ \hline \end{array}$$


$$\begin{array}{r} 68 \\ +40 \\ \hline \end{array}$$

NAME \_\_\_\_\_

# Christmas Addition

## WORD PROBLEMS

Directions: Read the following word math problems and write your answer in the box.

### PROBLEMS

### ANSWERS



If your Christmas tree had 10 stars on it and you added 6 Santa decorations, how many decorations would the tree have altogether ?



If your Christmas tree had 6 gifts under it and you added 6 more gifts, how many gifts under the Christmas tree is there altogether?



If had 12 candy canes on the Christmas tree and 4 in the kitchen, how many candy canes would you have altogether?



If Santa had 12 elf helpers making gifts and 4 elf helpers wrapping gifts, how many elf helpers are there altogether?






You have done some Christmas baking! If you have made 8 star cookies and 5 Christmas tree-shaped cookies, how many cookies would you have altogether?



NAME \_\_\_\_\_

# Christmas Graph

## HOW MANY CHRISTMAS ITEMS?

Directions: Count how many of each Christmas Item and color it on the graph



NAME \_\_\_\_\_

# Christmas Tree Math

## SKIP COUNTING

Directions: The Christmas Trees are missing some numbers! Fill in the blanks with the correct answer. Make sure you count by 2s, 5s, and 10s.



2



6



12



10



20



35



40



60




NAME \_\_\_\_\_

# Christmas Tree Add


## ADD ORNAMENTS TO THE TREE

---


Directions: Solve the addition problems below to find out how many ornaments to draw onto each tree.




$3+2=$  \_\_\_\_\_



$5+3=$  \_\_\_\_\_



$2+5=$  \_\_\_\_\_



$7+4=$  \_\_\_\_\_